



Mapping Roman Roads

I can label a map to show some Roman roads.

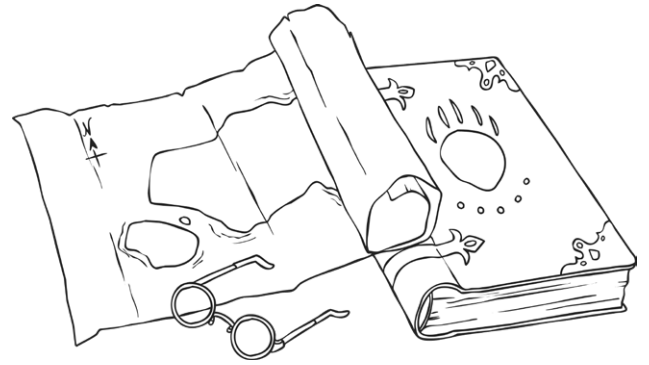


Use an atlas to locate the start and finish points of these Roman roads:

- The Fosse Way, Exeter to Lincoln
- Stane Street, Chichester to London
- Dere Street, York to Scotland

Mark and label the places on your map and then draw and label the road.

Use a different colour for each road.



planit

visit [twinkl.com](https://www.twinkl.com)

History | LKS2 | Romans | Roman Roads | Lesson 2



Mapping Roman Roads

I can label a map to show some Roman roads.

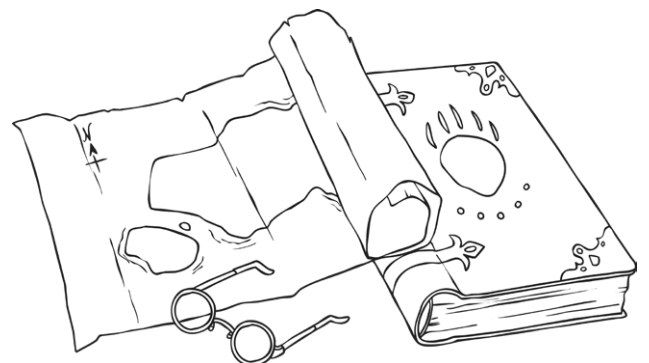


Use an atlas to locate the start and finish points of these Roman roads:

- The Fosse Way, Exeter to Lincoln
- Stane Street, Chichester to London
- Dere Street, York to Scotland

Mark and label the places on your map and then draw and label the road.

Use a different colour for each road.



planit

visit [twinkl.com](https://www.twinkl.com)

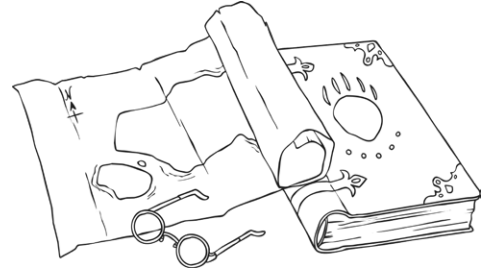
History | LKS2 | Romans | Roman Roads | Lesson 2

Mapping Roman Roads

I can label a map to show some Roman roads.

Use an atlas to locate the start and finish points of these Roman roads:

- The Fosse Way, Exeter to Lincoln
- Stane Street, Chichester to London
- Dere Street, York to Scotland
- Ermine street, London to York (via Lincoln)
- Akeman Street, St Albans to Cirencester



Mark and label the places on your map and then draw and label the road.

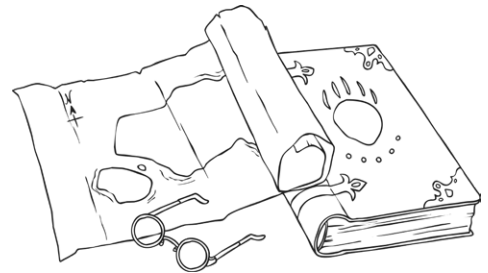
Use a different colour for each road.

Mapping Roman Roads

I can label a map to show some Roman roads.

Use an atlas to locate the start and finish points of these Roman roads:

- The Fosse Way, Exeter to Lincoln
- Stane Street, Chichester to London
- Dere Street, York to Scotland
- Ermine street, London to York (via Lincoln)
- Akeman Street, St Albans to Cirencester



Mark and label the places on your map and then draw and label the road.

Use a different colour for each road.



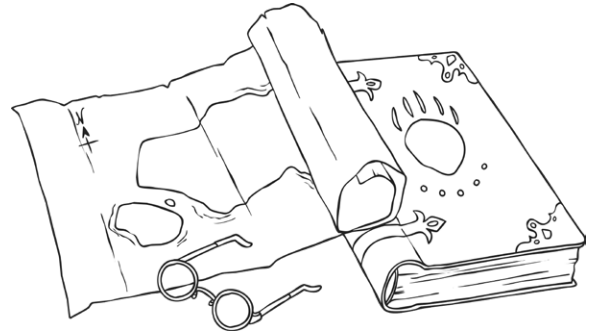
Mapping Roman Roads

I can label a map to show some Roman roads.



Use an atlas to locate the start and finish points of these Roman roads:

- The Fosse Way, Exeter to Lincoln
- Stane Street, Chichester to London
- Dere Street, York to Scotland
- Ermine street, London to York (via Lincoln)
- Akeman Street, St Albans to Cirencester
- Watling Street, Richborough to Wroxeter



Mark and label the places on your map and then draw and label the road.

Use a different colour for each road.

Challenge

Can you also label other important places that the roads passed through?

